



Determine which letter best represents the sum.

1) $\frac{1}{2} + \frac{1}{2}$

3) $\frac{2}{4} + \frac{2}{4}$

5) $\frac{11}{12} + \frac{5}{12}$

7) $\frac{3}{12} + \frac{11}{12}$

9) $\frac{4}{8} + \frac{7}{8}$

11) $\frac{2}{5} + \frac{1}{5}$

13) $\frac{7}{10} + \frac{1}{10}$

2) $\frac{4}{6} + \frac{2}{6}$

4) $\frac{11}{12} + \frac{1}{12}$

6) $\frac{2}{3} + \frac{2}{3}$

8) $\frac{1}{4} + \frac{1}{4}$

10) $\frac{6}{8} + \frac{2}{8}$

12) $\frac{3}{4} + \frac{2}{4}$

14) $\frac{6}{8} + \frac{1}{8}$

Answers

1. _____

2. _____

3. _____

4. _____

5. _____

6. _____

7. _____

8. _____

9. _____

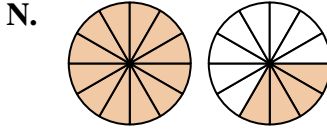
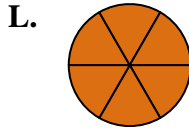
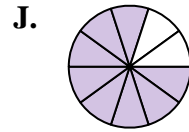
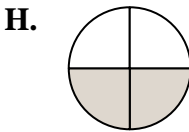
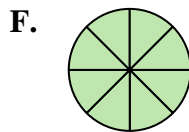
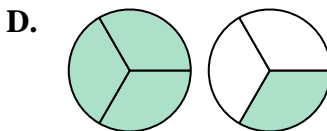
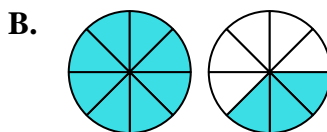
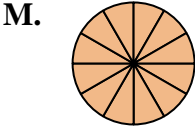
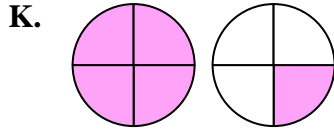
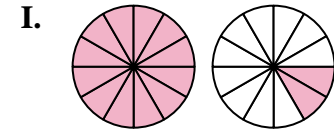
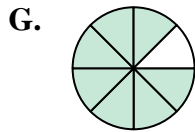
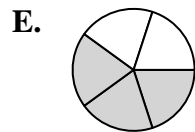
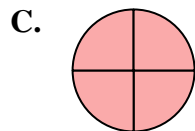
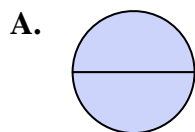
10. _____

11. _____

12. _____

13. _____

14. _____





Determine which letter best represents the sum.

1) $\frac{1}{2} + \frac{1}{2}$

3) $\frac{2}{4} + \frac{2}{4}$

5) $\frac{11}{12} + \frac{5}{12}$

7) $\frac{3}{12} + \frac{11}{12}$

9) $\frac{4}{8} + \frac{7}{8}$

11) $\frac{2}{5} + \frac{1}{5}$

13) $\frac{7}{10} + \frac{1}{10}$

2) $\frac{4}{6} + \frac{2}{6}$

4) $\frac{11}{12} + \frac{1}{12}$

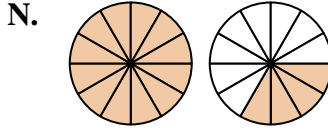
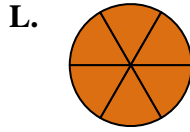
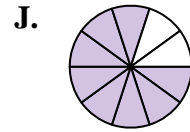
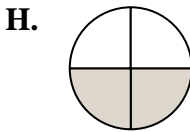
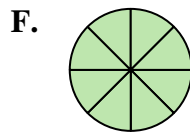
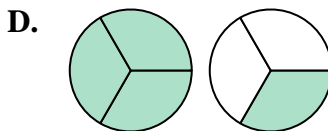
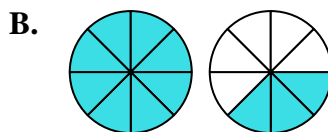
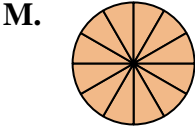
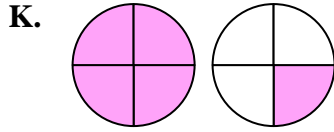
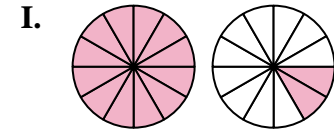
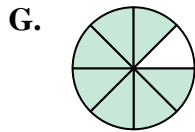
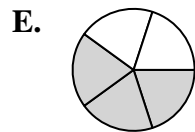
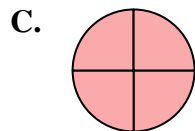
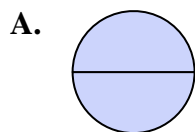
6) $\frac{2}{3} + \frac{2}{3}$

8) $\frac{1}{4} + \frac{1}{4}$

10) $\frac{6}{8} + \frac{2}{8}$

12) $\frac{3}{4} + \frac{2}{4}$

14) $\frac{6}{8} + \frac{1}{8}$



Answers

1. **A** $\frac{2}{2}$

2. **L** $\frac{6}{6}$

3. **C** $\frac{4}{4}$

4. **M** $1\frac{12}{12}$

5. **N** $1\frac{4}{12}$

6. **D** $1\frac{1}{3}$

7. **I** $1\frac{2}{12}$

8. **H** $\frac{2}{4}$

9. **B** $1\frac{3}{8}$

10. **F** $\frac{8}{8}$

11. **E** $\frac{3}{5}$

12. **K** $1\frac{1}{4}$

13. **J** $\frac{8}{10}$

14. **G** $\frac{7}{8}$